

Second Grade Homework

Due: Friday, June 1, 2018

Class website: You can find homework info, schedules, news, pictures, and more...

<http://caysecond.weebly.com>

Spelling Words: /oi/, /aw/, and /ough/.

1. lawn

6. naughty

11. ointment

2. haul

7. voyage

12. walnut

3. recall

8. noise

13. because

4. stalk

9. loyal

5. thoughts

10. rejoice

Upcoming News/Dates:

May 28, 2018: No School, Memorial Day

June 7, 2018: 2nd grade Water Day

June 21, 2018: Last Day of school

Name: _____

Consumers & Producers

Directions: Draw a line from the Consumer to the Producer that it needs.


Consumers

1. I need more food.
2. I need to buy a present for my friend's birthday.
3. I need to have my car's oil changed.
4. I want to buy my mom some flowers.
5. I need a hair cut.

Producers

- A. Toy Store
- B. Flower Shop
- C. Grocery Store
- D. Salon
- E. Mechanic Shop

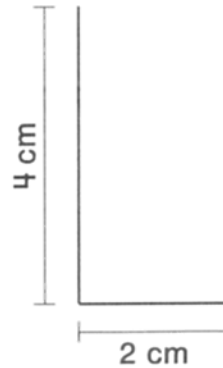
In the box below, draw a picture of something you buy (consumer), and a picture of where you buy it (the producer)



Name _____

1. What is the total length of the path?

- (A) about 2 centimeters
- (B) about 4 centimeters
- (C) about 6 centimeters
- (D) about 8 centimeters



2. Peter measures a path that has a total length of 12 centimeters. Janna measures a path that has two parts. Each part measures 7 centimeters.

How much longer is Janna's path than Peter's path?

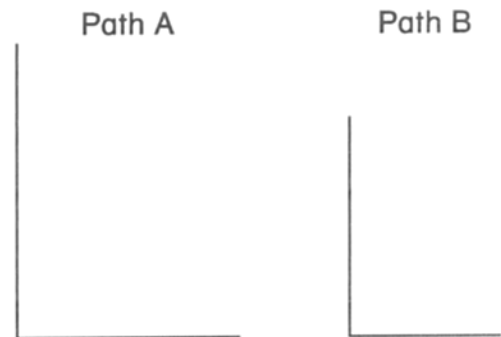
- (A) 14 centimeters
- (B) 10 centimeters
- (C) 7 centimeters
- (D) 2 centimeters

3. Use a centimeter ruler.

Measure each path at the right.

Path A _____ cm

Path B _____ cm



Which path is longer? Circle.

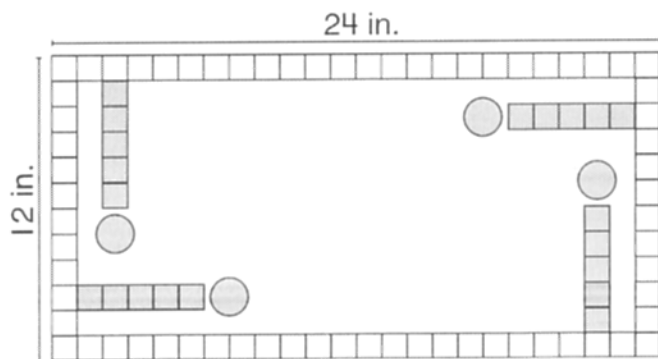
Path A

Path B

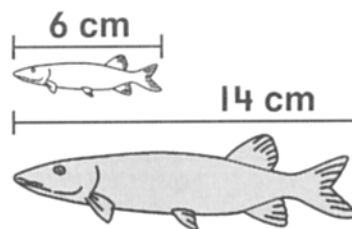
How much longer is the longer path? _____ centimeters

Name _____

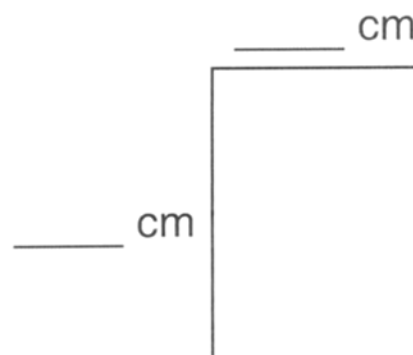
1. What is the difference in length between the left side of the game board and the top of the game board?



- (A) 12 in. (C) 48 in.
(B) 36 in. (D) 60 in.
2. Shantel has two fish.
The white fish is 6 cm long.
The gray fish is 14 cm long.
How much shorter is the white fish than the gray fish?



- (A) 7 cm (C) 20 cm
(B) 8 cm (D) 40 cm
3. An ant walks around this box.
How far does the ant walk?
Use a centimeter ruler to measure.
Show your work.



The ant walks _____ cm.

Apply

Visualization Strategy Look at each word below. If the word is spelled correctly, write the word *correct* on the line. If the word is misspelled, write the correct spelling on the line.

1. stauck _____
2. thoughts _____
3. rejoice _____
4. voiage _____
5. hough _____

Proofreading Strategy Read the story below. Circle any misspelled words. Then write the correctly spelled word on the line.

I can reackal one time I heard a noyze on our front laughn. When I went outside to investigate, I noticed a strange dog tearing through our trash can. Just then, our loil dog Scout chased the notty rascal away. What a sight!

1. _____
2. _____
3. _____
4. _____
5. _____

Name: _____

Directions: Read each sentence. Try each word in the blank.
Circle and write the word that makes sense.

1. Boy rhymes with _____.

coin joy boil



2. It isn't nice to _____ at people.

point boy destroy



3. A king and queen are part of a _____ family.

roil royal roll



4. An _____ lives in the ocean.

oister oil oyster



5. When you _____ water you can see steam.

boil boll boyal



6. Join rhymes with _____.

oil royal coin



7. Joy rhymes with _____.

toy soil oil



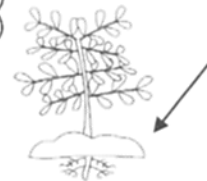
8. A snake can _____ like a spring.

coel coyal coil



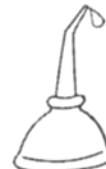
9. We planted a seed in the _____.

soyal soil soel



10. Boil, soil, and coil rhyme with _____.

oil oyal toy



Score: _____