

Second Grade Homework

Due: Friday, April 27, 2018

Class website: You can find homework info, schedules, news, pictures, and more...

<http://caysecond.weebly.com>

Spelling Words

1. blue

5. plow

9. scout

2. rude

6. count

10. books

3. frown

7. duty

11. loser

4. cookie

8. cool

12. snowplow

Upcoming News/Dates:

April 24-25, 2018: Picture Day

April 24, 2018: Daddy/Daughter Dance 4:30-6:30

May 28, 2018: No School, Memorial Day

June 21, 2018: Last Day of school

Name _____ Date _____

Review: Lessons 1-4

Focus

- The /oo/ sound sounds like the word *moo*. It can be spelled *oo*, *u*, *u_e*, *_ew*, and *_ue*.
- The /*oo*/ sound sounds like the word *look*. It is spelled *oo*.
- The /*ow*/ sound sounds like the word *now*. It can be spelled *ow* and *ou_*.

Word List

1. blue
2. rude
3. frown
4. cookie
5. plow
6. count
7. duty
8. cool
9. scout
10. books

Practice

Sort the spelling words under the correct heading.

The /oo/ sound

- | | |
|----------|----------|
| 1. _____ | 2. _____ |
| 3. _____ | 4. _____ |

The /*oo*/ sound

- | | |
|----------|----------|
| 5. _____ | 6. _____ |
|----------|----------|

The /*ow*/ sound

- | | |
|----------|-----------|
| 7. _____ | 8. _____ |
| 9. _____ | 10. _____ |

Challenge Words

11. loser
12. snowplow

Name _____ Date _____

Colons

Focus

- **Colons** are used to introduce a list. **Commas** should separate the items in the list.
- **Colons** also separate the hour and the minutes when you write the time.

Practice

Write the time written in each sentence using numbers on the blank line after the sentence.

1. At **two-ten** the doors are locked. _____
2. We must leave the house by **one-thirty**. _____
3. Her birthday party will begin at **five o'clock**. _____
4. **Twelve-fifteen** is our lunchtime. _____


Add missing colons and commas to the following sentences.

1. Place these things in your suitcase shoes shorts and shirts.
2. These are the best things in life love music and friends.
3. Your backpack should have these items paper pencils and folders.

Name: _____

Subtraction

Subtract to find the differences.



a.
$$\begin{array}{r} 92 \\ - 41 \\ \hline \end{array}$$

b.
$$\begin{array}{r} 66 \\ - 37 \\ \hline \end{array}$$

c.
$$\begin{array}{r} 54 \\ - 43 \\ \hline \end{array}$$

d.
$$\begin{array}{r} 83 \\ - 36 \\ \hline \end{array}$$

e.
$$\begin{array}{r} 51 \\ - 27 \\ \hline \end{array}$$

f.
$$\begin{array}{r} 77 \\ - 8 \\ \hline \end{array}$$

g.
$$\begin{array}{r} 96 \\ - 17 \\ \hline \end{array}$$

h.
$$\begin{array}{r} 44 \\ - 0 \\ \hline \end{array}$$

i.
$$\begin{array}{r} 66 \\ - 52 \\ \hline \end{array}$$

j.
$$\begin{array}{r} 68 \\ - 36 \\ \hline \end{array}$$

k.
$$\begin{array}{r} 99 \\ - 99 \\ \hline \end{array}$$

- l. Billy has a box of 36 crayons.
He broke 10 of them.
How many crayons does Billy have left? _____

- m. Leah has 64 crayons.
She gives away 13.
How many crayons does Leah have? _____

Name: _____

Telling Time

Write the time shown.


a.



b.




c.



d.



e.



f.



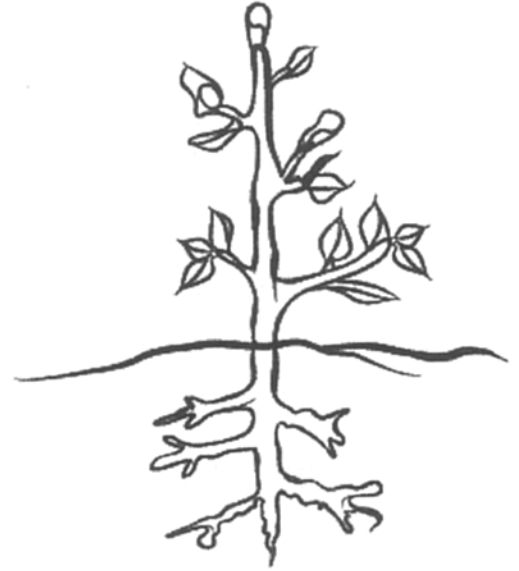
Plant Life Cycle

Place the plant life cycle in order from beginning to end.


Sprouting Seed



Plant with buds



Plant with flowers



Seed

